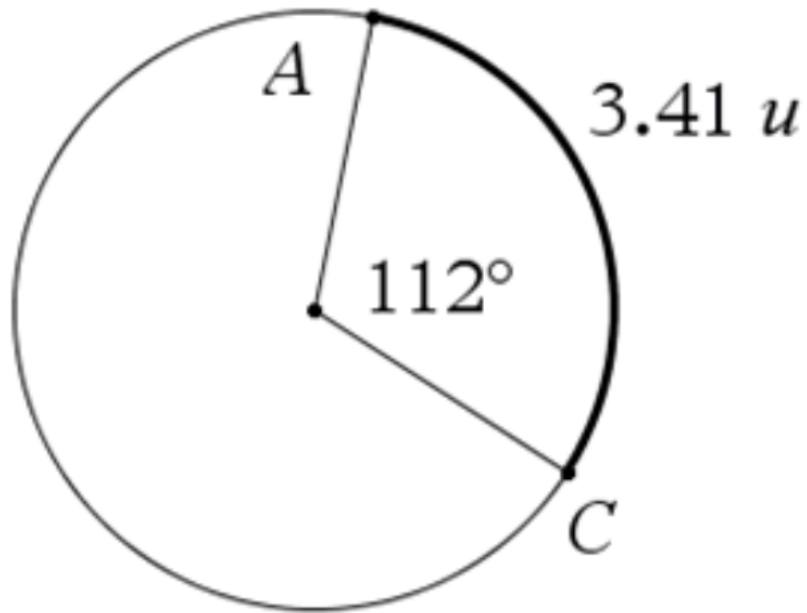


Problem 1



Determine the radius of the circle

$$s = \theta r$$

We know $s = 3.41$ units

we know angle in degrees is 112°

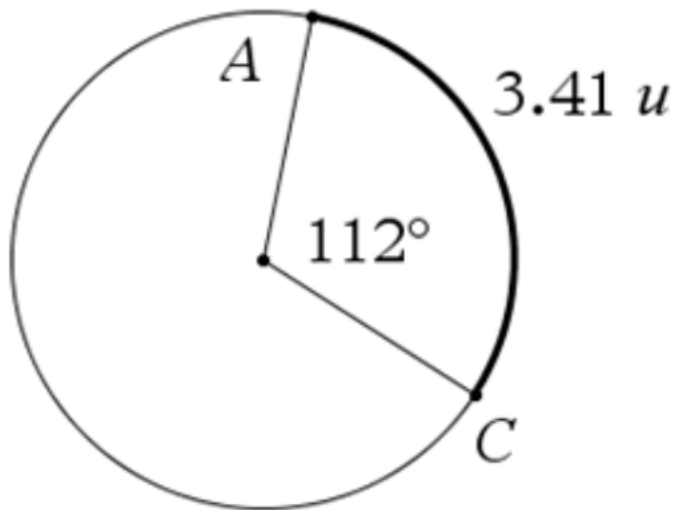
Step 1) Find θ

$$\theta = 112^\circ \cdot \frac{\pi \text{ radians}}{180^\circ}$$

$$= \frac{112}{180} \pi \text{ radians} = \frac{28}{45} \pi \text{ radians}$$

Step 2) Solve for r

$$3.41 = \left(\frac{112}{180} \pi \right) r$$



Determine the radius of the circle

$$s = \theta r$$

$$s = 3.41 \text{ units}$$

angle in degrees is 112°

$$\theta = \frac{112}{180} \pi \text{ radians}$$

Use $s = \theta r$ replace s and θ and solve for r

Step 2) Solve for r

$$3.41 = \left(\frac{112}{180} \pi \right) r$$

$$\frac{3.41}{1} = \frac{112\pi r}{180}$$

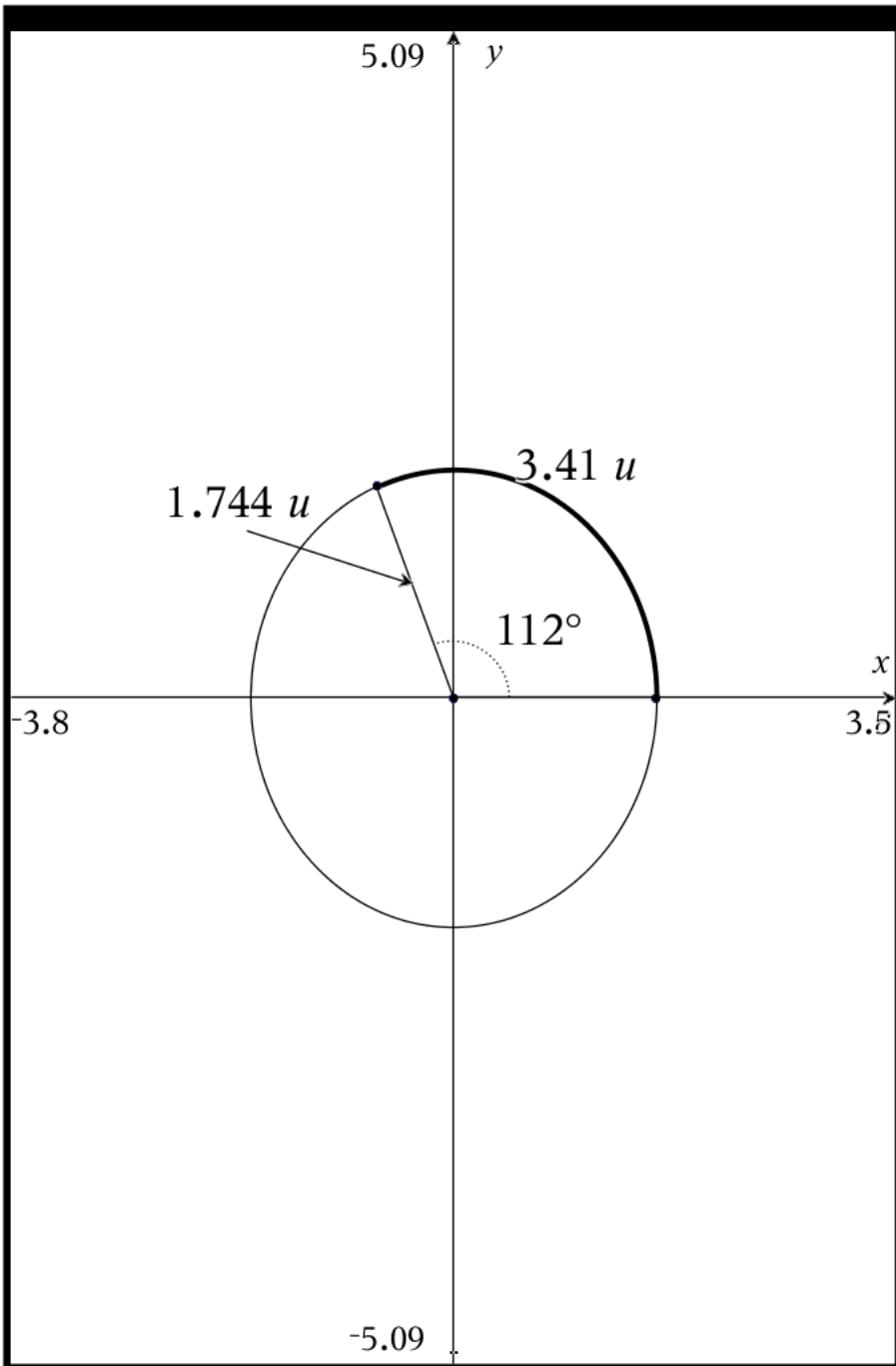
$$3.41 \cdot 180 = 112\pi r$$

$$613.8 = 112\pi r$$

$$\frac{613.8}{112\pi} = \frac{112\pi r}{112\pi}$$

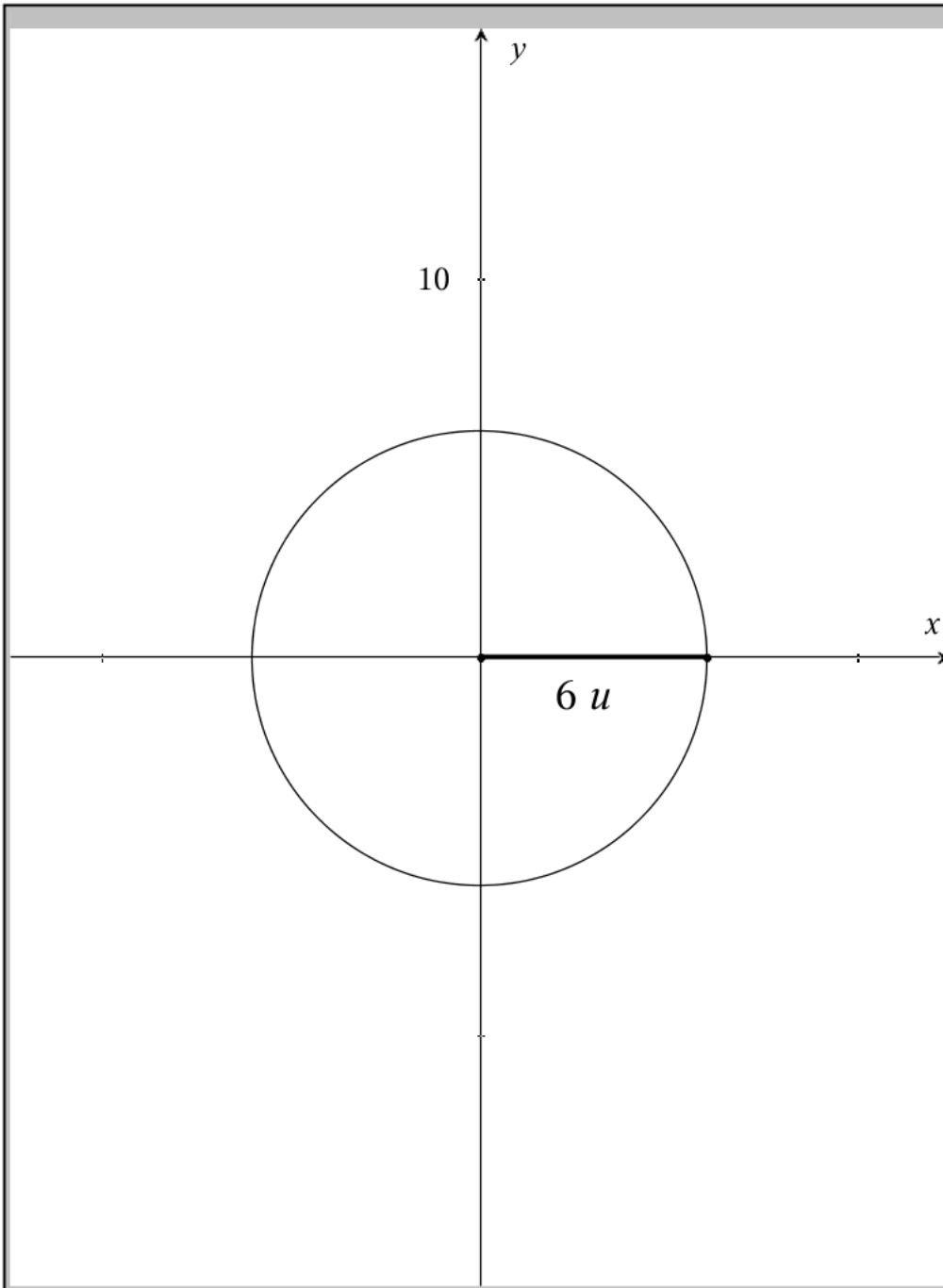
$$r = \frac{613.8}{112\pi} = \frac{6138}{1120\pi} = \frac{3069}{560 \cdot \pi}$$

$$r \approx 1.744 \text{ units}$$



This drawing was created with a computer and it checks that the radius is $\frac{3069}{560 \cdot \pi} \approx 1.744$

Problem 2



Drum with a diameter of 12 meters is making 3.6 revolutions per minute

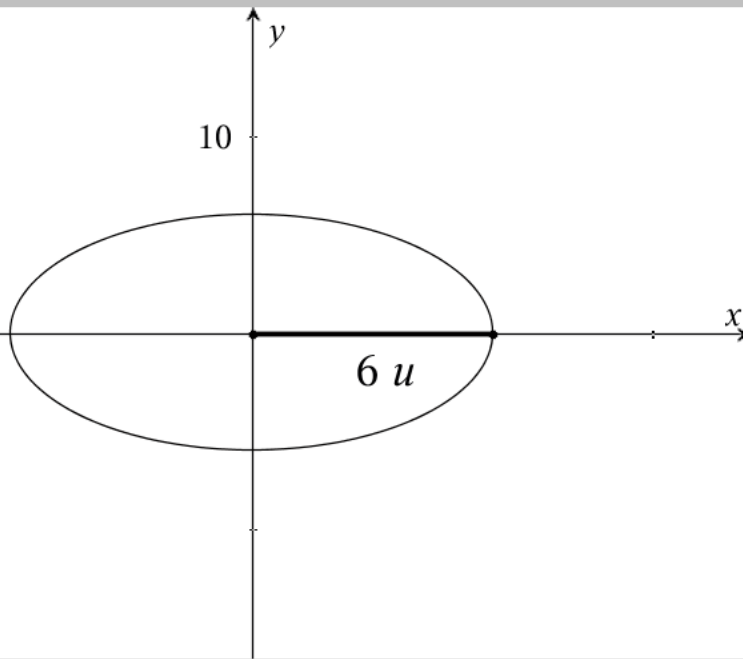
3.6 revolutions per min

$$\begin{aligned} \text{Angular speed} &= \frac{3.6 \text{ rev.}}{\text{min.}} \cdot \frac{360^\circ}{\text{rev}} \\ &= \frac{1296^\circ}{\text{min}} \end{aligned}$$

$$\begin{aligned} \text{Angular speed} &= \frac{3.6 \text{ rev.}}{\text{min.}} \cdot \frac{2\pi}{\text{rev}} \\ &= \frac{7.2\pi \text{ radians}}{\text{min}} \end{aligned}$$

Note Linear Speed = (Angular speed)(radius)

$$\begin{aligned} &= \frac{7.2\pi \text{ radians}}{\text{min}} \cdot \frac{6\text{m.}}{\text{radian}} \\ &= \frac{43.2\pi \text{ m}}{\text{min}} \end{aligned}$$



$$\text{Angular speed} = \frac{3.6 \text{ rev.}}{\text{min.}} \cdot \frac{2\pi}{\text{rev}}$$

$$= \frac{7.2\pi \text{ radians}}{\text{min}}$$

$$\theta = 7.2 \cdot \pi \text{ radians} \quad r = \frac{12}{2} = 6 \text{ meters}$$

Drum with a diameter of 12 meters is making 3.6 revolutions per minute

$$\text{Linear Speed} = \frac{\theta r}{t} = \frac{7.2 \cdot \pi \cdot 6 \text{ m.}}{1 \text{ min.}}$$

$$= \frac{43.2 \cdot \pi \text{ m.}}{1 \text{ min}}$$

$$\approx 135.717 \frac{\text{m.}}{\text{min.}}$$

Now convert meters/min to meters/sec

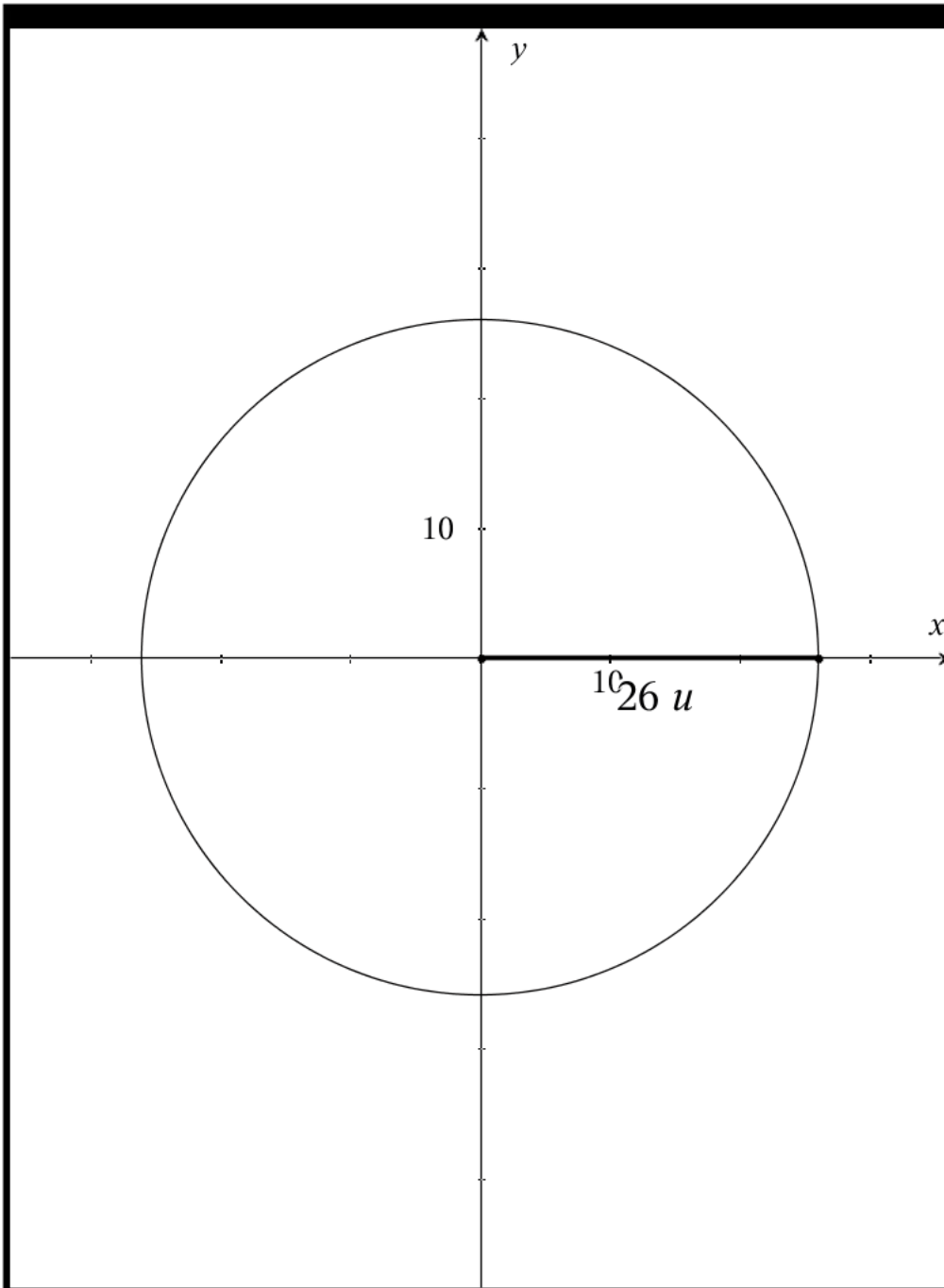
$$\text{Linear Speed} = \frac{43.2 \cdot \pi \text{ m.}}{1 \text{ min}} \cdot \frac{1 \text{ min}}{60 \text{ sec}}$$

$$= \frac{43.2\pi \text{ m.}}{60 \text{ sec}} = \frac{0.72\pi \text{ m.}}{\text{sec}}$$

$$= \frac{18\pi}{25} \frac{\text{m.}}{\text{sec.}}$$

$$\approx 2.262 \frac{\text{m}}{\text{sec}}$$

Problem 3



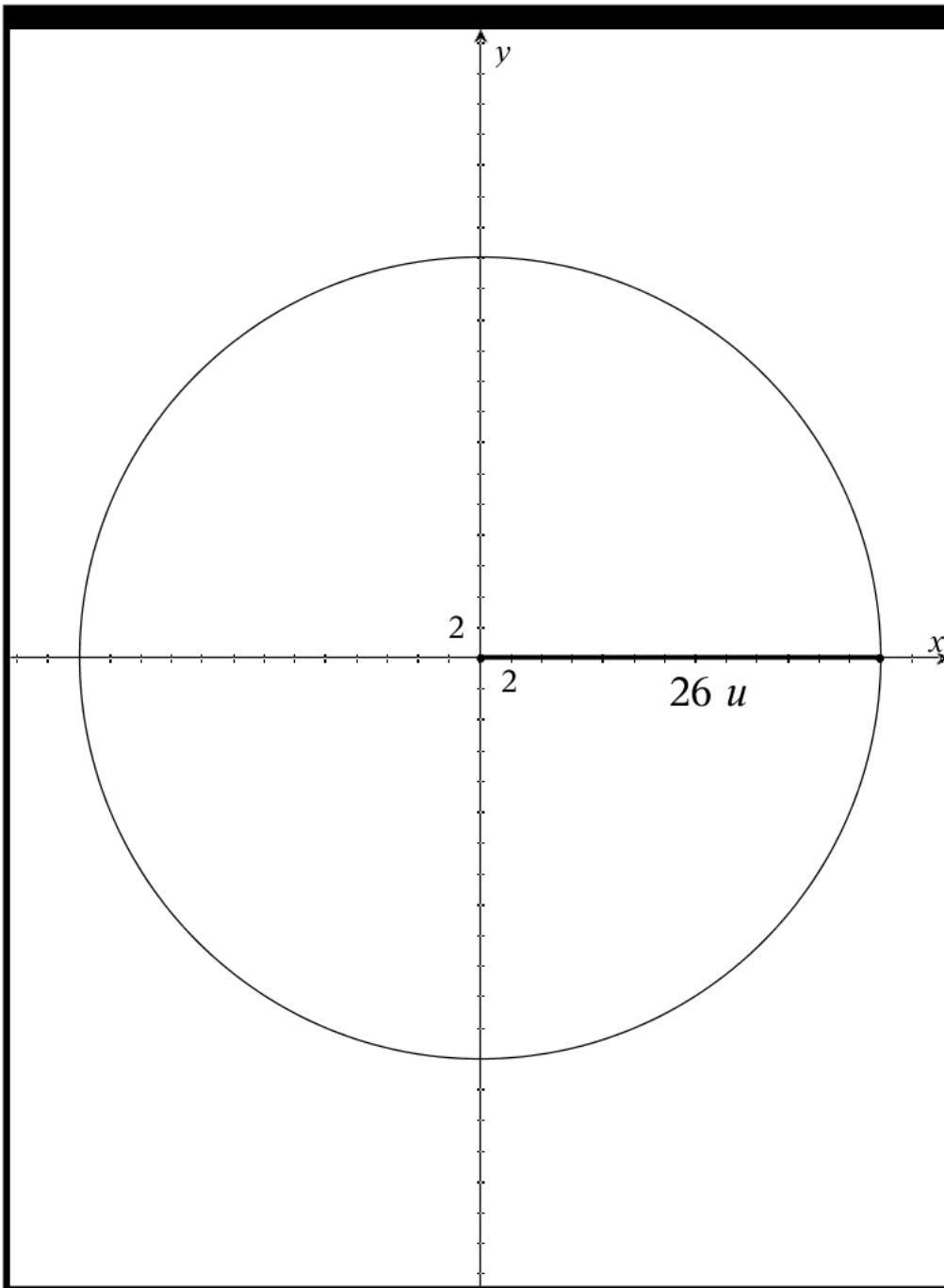
tire with a radius of 26 meters is making 4.5 revolutions per 20 seconds

4.5 revolutions per 20 seconds

$$\frac{4.5}{20} = 0.225 \text{ revolution per second}$$

$$\begin{aligned} \text{Angular speed} &= \frac{0.225 \text{ rev.}}{\text{sec.}} \cdot \frac{360^\circ}{\text{rev}} \\ &= \frac{81^\circ}{\text{sec}} \end{aligned}$$

$$\begin{aligned} \text{Angular speed} &= \frac{0.225 \text{ rev.}}{\text{sec.}} \cdot \frac{2\pi}{\text{rev}} \\ &= \frac{0.45\pi \text{ radians}}{\text{sec}} \end{aligned}$$



tire with a radius of 26 inches is making 4.5 revolutions per 20 seconds

$$\begin{aligned} \text{Angular speed} &= \frac{0.225 \text{ rev.}}{\text{sec.}} \cdot \frac{2\pi}{\text{rev}} \\ &= \frac{0.45\pi \text{ radians}}{\text{sec}} \\ &\approx 1.414 \frac{\text{radians}}{\text{sec}} \end{aligned}$$

Now convert radians/sec to radians/min

$$\begin{aligned} \text{Angular Speed} &= \frac{0.45 \cdot \pi \text{ radians.}}{1 \text{ sec}} \cdot \frac{60 \text{ sec}}{1 \text{ min}} \\ &= \frac{27\pi \text{ radians}}{1 \text{ min}} \\ &\approx 84.823 \frac{\text{radians}}{\text{min}} \end{aligned}$$